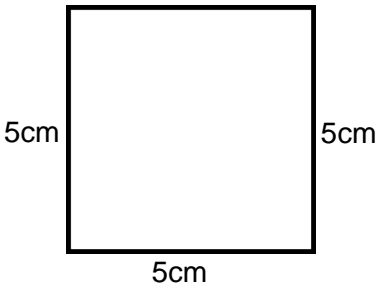
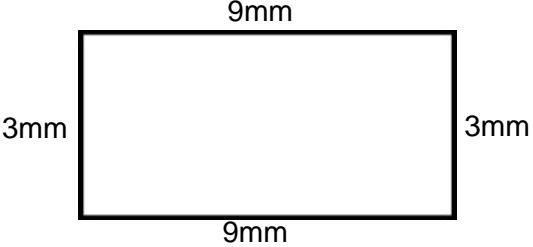
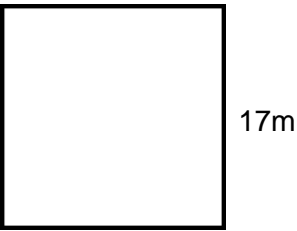
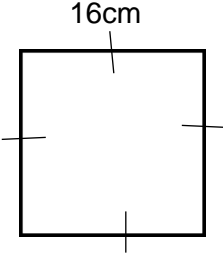
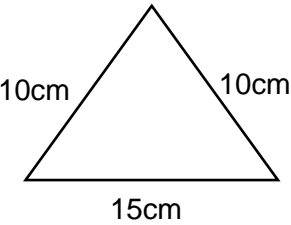
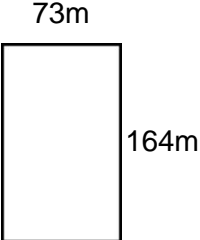
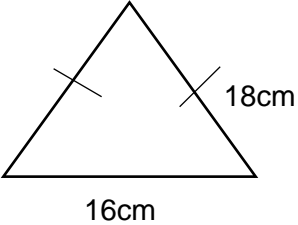
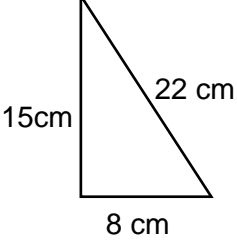
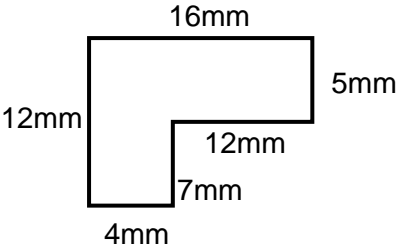
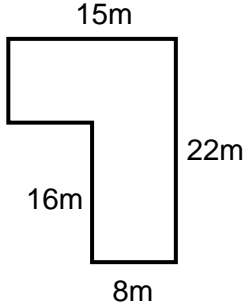
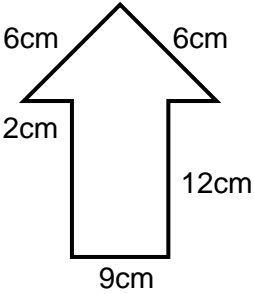
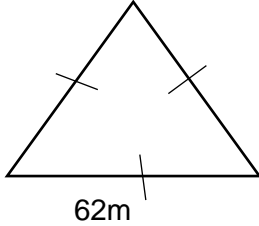
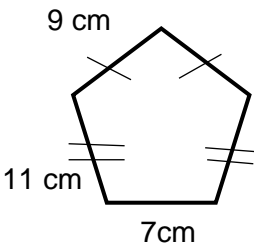
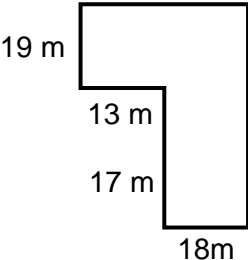


Calculate the perimeter of the following shapes

<p>1</p> 	<p>2</p> 
<p>3</p> 	<p>4</p> 
<p>5.</p> 	<p>6.</p> 
<p>7.</p> 	<p>8.</p> 

<p>9</p> 	<p>10</p> 
<p>11</p> 	<p>12</p> 
<p>13.</p> 	<p>14.</p> 

15. Calculate the perimeter of a square if the length of one of its sides is 17,5 cm.

16. One side of an equilateral triangle is 32 cm. Calculate the triangle's perimeter.

17. Calculate the length of one side of a square if the perimeter of the square is 68m.

18. Two sides of a triangle are 9 cm each. Calculate the length of the third side if the triangle's perimeter is 33 cm.

19. A rectangle is 40 cm long and 25 cm wide. Calculate its perimeter.

20. Calculate the perimeter of a rectangle that is 7 m wide and 4 m long.

21. The perimeter of a rectangle is 35 m. How long is the rectangle if it is 7 m wide?